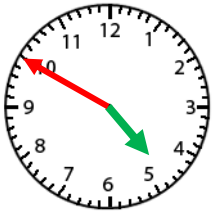


Name: _____

Telling Time- Nearest 5 Minute

Count by 5 for the minute hand.

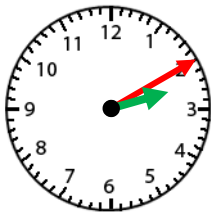
The hour hand will be close to the bigger number. Use the smaller number.



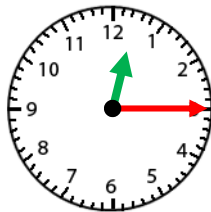
4:50



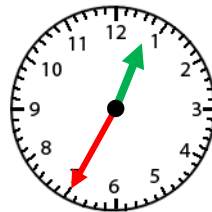
4:50



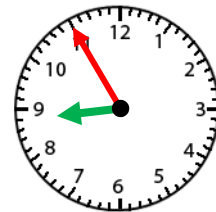
1. _____



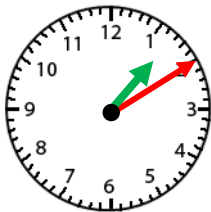
2. _____



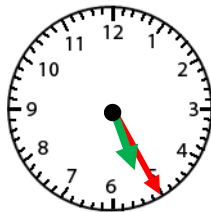
3. _____



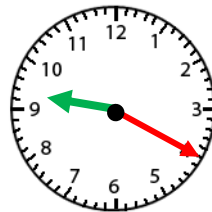
4. _____



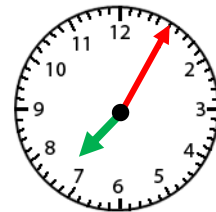
5. _____



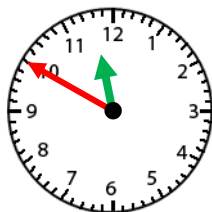
6. _____



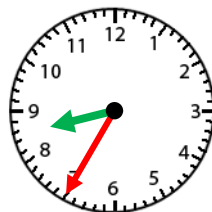
7. _____



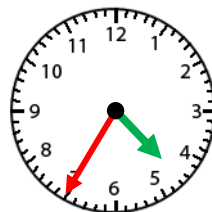
8. _____



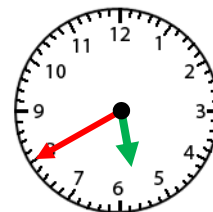
9. _____



10. _____



11. _____



12. _____