


Name: _____ Date: _____

Telling Time- One Minute


Write the time on the clock.

1.




1:45

2.




6:50

3.




7:57

4.




5:51

5.




9:32

6.




10:09

7.




6:43

8.




4:44

9.




12:42

10.




9:19

11.




10:20

12.




7:20

13.




2:29

14.



10:43

15.



10:49