


Name: _____ Date: _____

Telling Time- Hours


Write the time on the clock.

1.



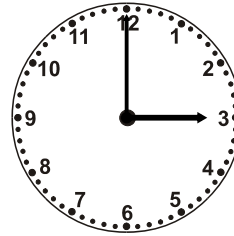
11:00

2.




8:00

3.




3:00

4.




12:00

5.



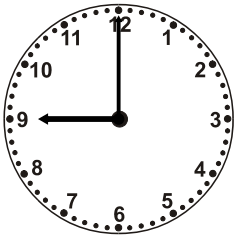
7:00

6.




5:00

7.




9:00

8.




10:00

9.




6:00

10.




4:00

11.




2:00

12.




1:00

13.




7:00

14.



2:00

15.



5:00