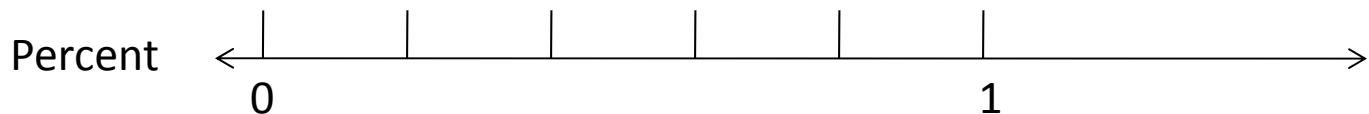
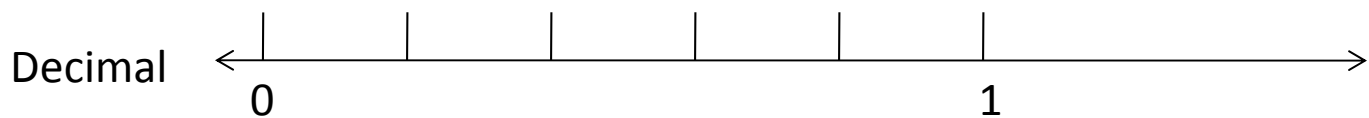
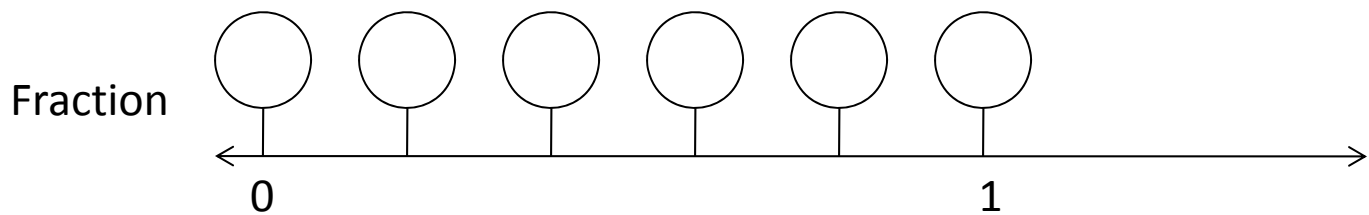


Name: _____

Label the number equivalencies

Fifths



Demonstrate the equivalencies:

The percent 20% is equal to the decimal _____.

The fraction $\frac{5}{5}$ is equal to the percent _____.

The decimal 0.60 is equal to the fraction _____.

The percent 80% is equal to the fraction _____.

The fraction $\frac{1}{5}$ is equal to the decimal _____.

The decimal 0.00 is equal to the percent _____.

Draw picture of something with fifths or that has five parts:

