

Name: _____ Date: _____


Counting Quarters


Add the coins. Write the amount.


1.  = \$1.25

2.  = \$1.75

3.  = \$1.50

4.  = \$0.75

5.  = \$1.00

6.  = \$0.75

7.  = \$1.75

8.  = \$1.50