

Name: _____ Date: _____


Counting Nickels and Pennies


Add the coins. Write the amount.

1.  = **\$0.13** _____

2.  = **\$0.15** _____


3.  = **\$0.11** _____

4.  = **\$0.21** _____

5.  = **\$0.07** _____

6.  = **\$0.09** _____

7.  = **\$0.08** _____

8.  = **\$0.17** _____

9.  = **\$0.11** _____

10.  = **\$0.14** _____